



Solve the following additions (Triangles)



$1+9=$	$2+5=$	$5+5=$	$5+10=$	$0+14=$
$24+2=$	$24+2=$	$20+10=$	$10+11=$	$30+5=$
$25+1=$	$22+10=$	$25+5=$	$3+2=$	$10+17=$
$16+10=$	$32+1=$	$15+2=$	$10+27=$	$12+1=$
$47+1=$	$2+16=$	$5+0=$	$33+2=$	$17+2=$
$0+5=$	$42+2=$	$40+10=$	$15+5=$	$2+23=$


Solve the following subtractions



Remember you know how to count backward in 1s, 2s, 5s and 10s!

$9-1=$	$5-2=$	$5-5=$	$10-2=$	$14-0=$
$2-0=$	$24-2=$	$30-10=$	$11-10=$	$20-5=$
$25-1=$	$42-10=$	$25-5=$	$13-2=$	$17-10=$
$15-10=$	$33-1=$	$19-2=$	$47-7=$	$12-1=$
$27-7=$	$16-2=$	$5-0=$	$33-2=$	$27-2=$
$10-5=$	$22-2=$	$40-10=$	$15-5=$	$13-3=$

Solve the following number sentences



$18-5=$	$2+2+2+10=$	$15-5=$
$12-2=$	$14-3=$	$16-5=$
$35+3=$	$22+10=$	$5+15=$
$10+9=$	$19-7=$	$5+5+5+5+5=$
$8+8=$	$12-6=$	$16-0=$
$10-1=$	$17+2=$	$23-10=$

Find the missing numbers. Draw your own part-part-whole model to help you to find your answers.

$$14 + \square = 16$$

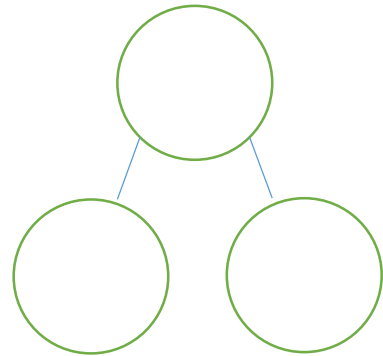
$$15 + \square = 12 + 3$$

$$8 + \square = 16$$

$$\square - 10 = 15$$

$$\square + 3 = 10$$

$$17 - \square = 12$$



Compare the following numbers and number sentences using the signs $<$, $>$, $=$

32 Two tens and 3 ones


14 $10+5$

$12-1$ 8

$15+5$ 20

$11-3$ 10

Using these numbers answer the following questions:



- What is the biggest 2 digits number you can make?
- What is the smallest 2 digits number you can make?
- Write a two digit number that has 2 ones?
- Write a number smaller than 24 but greatest than 15?
- What is the smallest number you can make with 4 tens?
- What is the biggest number you can make with 1 ten?

Mia had 20 sweets, and she gave out one to each child in her class. There are 17 children in the class. How many sweets does Mia have left?



Marcel has some red beads and Alice has 9. Altogether they have 20, how many red beads does Marcel have?




Madison picked up 6 daisies from the field, Kenna picked 5 and Gloria 6 more. How many daisies do they have altogether?



Kacper is 4 years older than his sister. His sister is 10. How old is Kacper?

Loella has a 15cm long ribbon, and Kaja has a 9 cm one. Ezmai has lost her ribbon, but she remembers that her ribbon was shorter than Loella's and longer than Kaja's. How long could Ezmai's ribbon have been?



I am thinking of a number and 16 is one less than my number. What is my number?

